

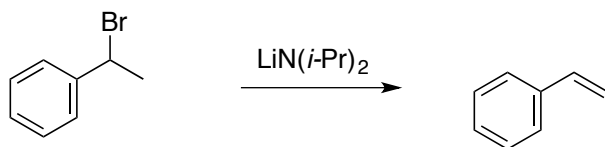
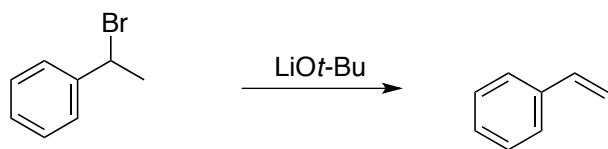
Quiz 2 (Wednesday morning)

Name:

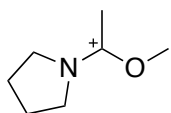
Recitation Instructor:

The following quiz is 20 points. You have 20 minutes to complete it. Good Luck!

1. Predict which of the following E2 reactions would go faster. Briefly explain your answer. (5 points)



2. Show **two** other resonance form for the following molecule. Which one is the major resonance form? (10 points)



3. Show a mechanisms for the following acid-base reaction (5 points)

